






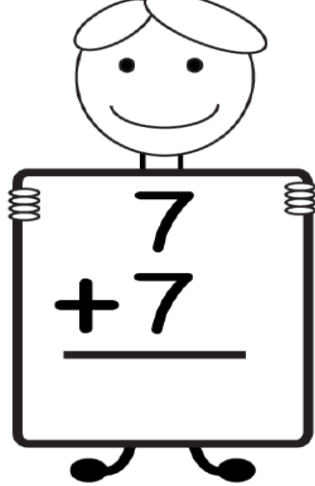




Όνομα: _____

 <p>Τα διπλά αθροίσματα</p>	 $\begin{array}{r} 1 \\ + 1 \\ \hline \end{array}$	 $\begin{array}{r} 2 \\ + 2 \\ \hline \end{array}$	 $\begin{array}{r} 3 \\ + 3 \\ \hline \end{array}$	 $\begin{array}{r} 4 \\ + 4 \\ \hline \end{array}$
 $\begin{array}{r} 5 \\ + 5 \\ \hline \end{array}$	 $\begin{array}{r} 6 \\ + 6 \\ \hline \end{array}$	 $\begin{array}{r} 7 \\ + 7 \\ \hline \end{array}$	 $\begin{array}{r} 8 \\ + 8 \\ \hline \end{array}$	 $\begin{array}{r} 9 \\ + 9 \\ \hline \end{array}$