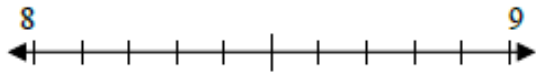


Όνομα: _____

1. Σημείωσε πάνω στις αριθμογραμμές τον δεκαδικό αριθμό

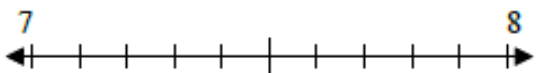
1) 8.15



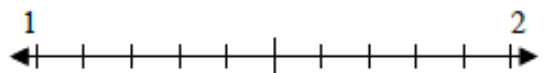
2) 3.7




3) 7.7




4) 1.7



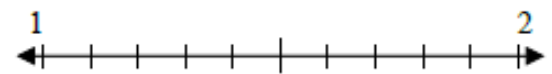
5) 9.7



6) 1.4



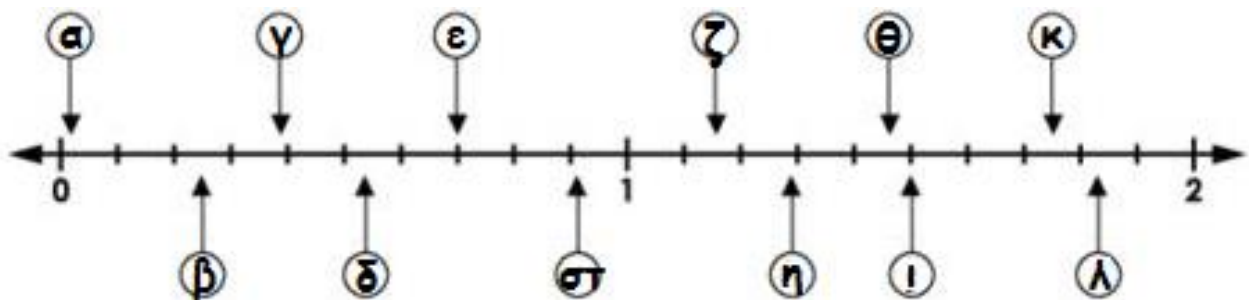
7) 1.9



8) 0.7



2. Γράψε το σωστό γράμμα δίπλα από κάθε δεκαδικό αριθμό, όπως το παράδειγμα



0.38 γ 1.16 _____ 1.75 _____ 0.54 _____

0.70 _____ 1.47 _____ 0.02 _____ 1.50 _____

1.29 _____ 0.25 _____ 1.83 _____ 0.91 _____