

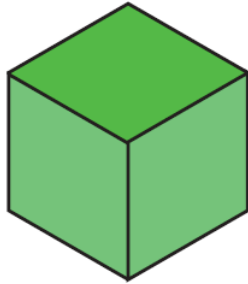

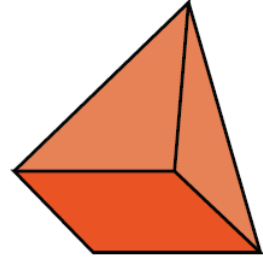
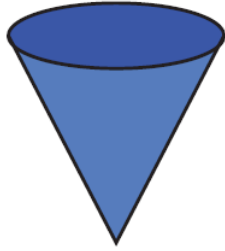

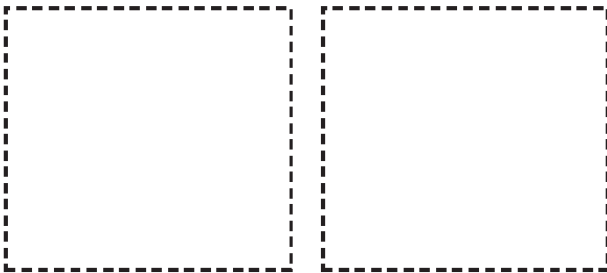


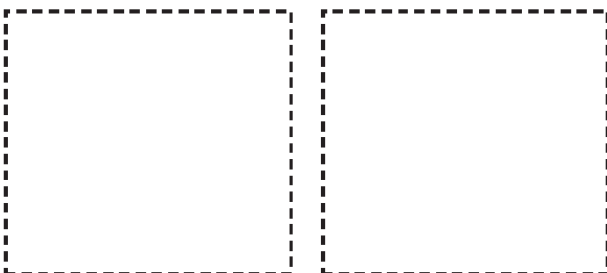
Όνομα: _____ Ημερομηνία: _____



Κόψε τις παραπάνω εικόνες και κόλλησέ τες στη σωστή κατηγορία. Γράψε κάτω από κάθε σχήμα το όνομά του

ΓΕΩΜΕΤΡΙΚΑ ΣΧΗΜΑΤΑ





ΓΕΩΜΕΤΡΙΚΑ ΣΤΕΡΕΑ

