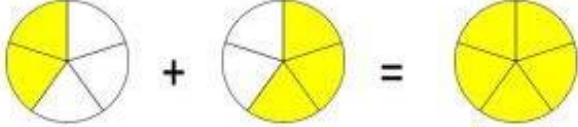




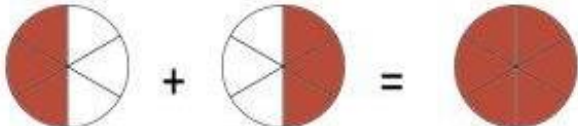
Όνομα: _____ Ημερομηνία: _____


1. Πρόσθεσε τα παρακάτω (ομώνυμα) κλάσματα

1. 
 $\frac{2}{5} + \frac{3}{5} = \square$

2. 
 $\frac{2}{6} + \frac{1}{6} = \square$

3. 
 $\frac{2}{7} + \frac{3}{7} = \square$

4. 
 $\frac{3}{6} + \frac{3}{6} = \square$

5. 
 $\frac{2}{8} + \frac{2}{8} = \square$

emathima.gr