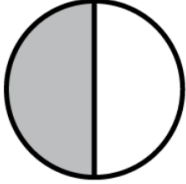








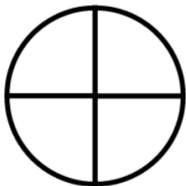
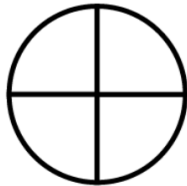



Όνομα: _____

Ημερομηνία: _____

1. Χρωμάτισε και χρησιμοποίησε το $>$, $<$ ή $=$ για να συγκρίνεις τα κλάσματα

  $\frac{1}{2} > \frac{1}{3}$	  $\frac{4}{12} \square \frac{2}{4}$
  $\frac{3}{4} \square \frac{2}{3}$	  $\frac{6}{12} \square \frac{3}{8}$
  $\frac{1}{2} \square \frac{3}{4}$	  $\frac{2}{4} \square \frac{2}{5}$