






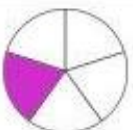





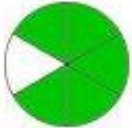
Όνομα: _____ Ημερομηνία: _____




1. Πρόσθεσε τα παρακάτω (ομώνυμα) κλάσματα

1.  +  = 
 $\frac{1}{4} + \frac{3}{4} = \square$

2.  +  = 
 $\frac{2}{3} + \frac{1}{3} = \square$

3.  +  = 
 $\frac{2}{5} + \frac{1}{5} = \square$

4.  +  = 
 $\frac{1}{6} + \frac{4}{6} = \square$

5.  +  = 
 $\frac{1}{2} + \frac{1}{2} = \square$