
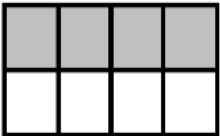



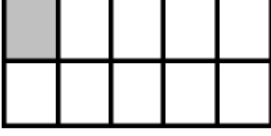
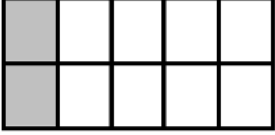
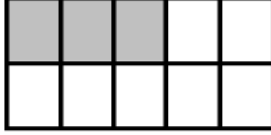


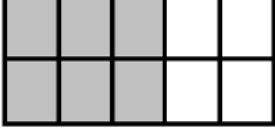



Όνομα: _____

Ημερομηνία: _____

1. Γράψε τα σωστά κλάσματα

 $\frac{6}{8}$	 $\frac{\quad}{\quad}$
 $\frac{\quad}{\quad}$	 $\frac{\quad}{\quad}$
 $\frac{\quad}{\quad}$	 $\frac{\quad}{\quad}$
 $\frac{\quad}{\quad}$	 $\frac{\quad}{\quad}$
 $\frac{\quad}{\quad}$	 $\frac{\quad}{\quad}$
 $\frac{\quad}{\quad}$	 $\frac{\quad}{\quad}$