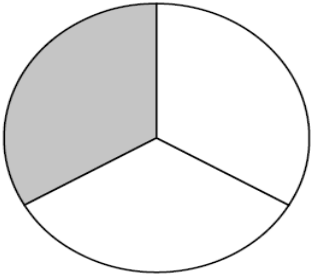
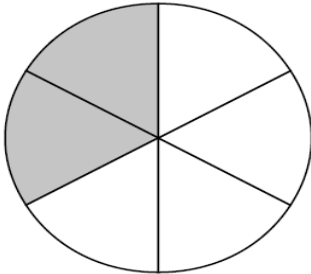
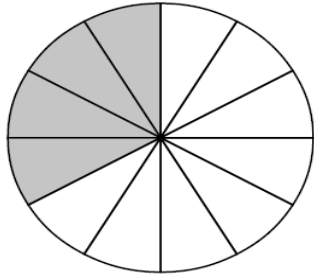


# Ισοδύναμα κλάσματα

Όνομα:.....

## 1. Συμπλήρωσε τις ισότητες

$\frac{1}{3}$	$\frac{2}{6}$	$\frac{4}{12}$
		
$\frac{1}{3} = \frac{\square}{6}$	$\frac{2}{6} = \frac{\square}{3}$	$\frac{4}{12} = \frac{\square}{3}$
$\frac{1}{3} = \frac{\square}{12}$	$\frac{2}{6} = \frac{\square}{12}$	$\frac{4}{12} = \frac{\square}{6}$