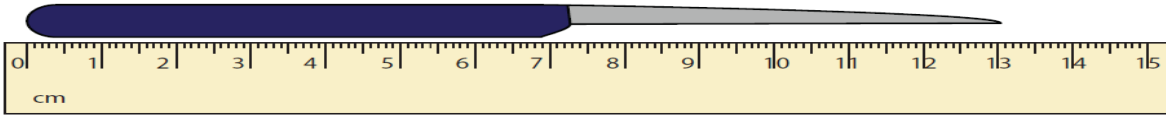


## Επαναληπτικό μάθημα (Κεφάλαια 8-12)

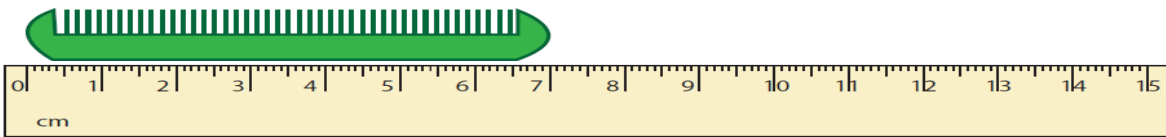


Όνομα:.....

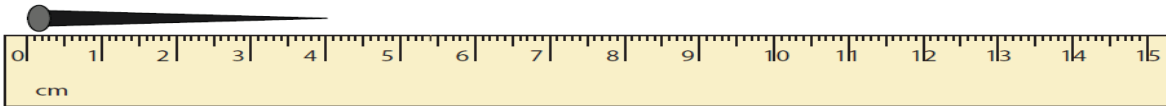
### 1. Γράψε πόσα εκατοστά είναι το κάθε αντικείμενο



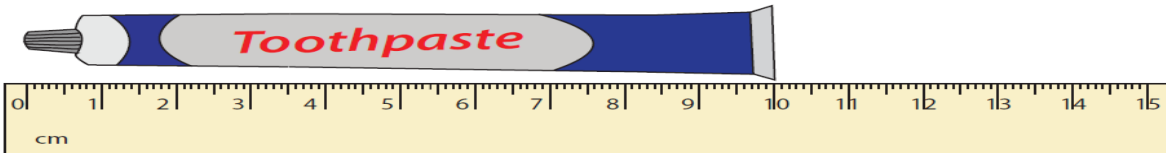
\_\_\_\_\_



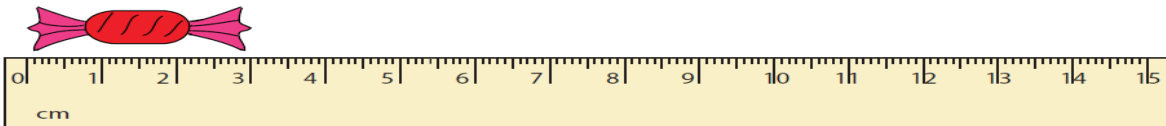
\_\_\_\_\_



\_\_\_\_\_



\_\_\_\_\_

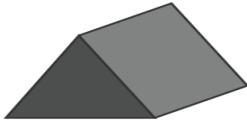
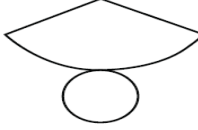

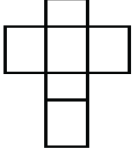

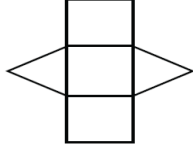

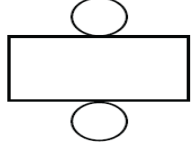

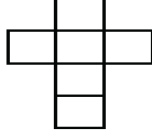
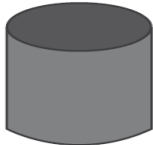
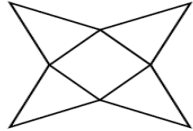


\_\_\_\_\_

### 2. Κάνε τις παρακάτω αφαιρέσεις

	9	2	6			8	3	5			9	5	6
-	6	5	8		-	3	6	8		-	5	9	8
<hr/>					<hr/>					<hr/>			
	9	2	3			7	5	3			8	2	3
-	5	6	7		-	3	7	8		-	3	8	6
<hr/>					<hr/>					<hr/>			

### 3. Αντιστοίχισε τα γεωμετρικά στερεά με τα σωστά αναπτύγματα

	<input type="radio"/>	
	<input type="radio"/>	
	<input type="radio"/>	
	<input type="radio"/>	
	<input type="radio"/>	
	<input type="radio"/>	

### 4. Κάνε τους παρακάτω κάθετους πολλαπλασιασμούς

1) 36

$$\begin{array}{r} \times 9 \\ \hline \end{array}$$

\_\_\_\_\_

2) 49

$$\begin{array}{r} \times 8 \\ \hline \end{array}$$

\_\_\_\_\_

3) 78

$$\begin{array}{r} \times 4 \\ \hline \end{array}$$

\_\_\_\_\_

4) 56

$$\begin{array}{r} \times 5 \\ \hline \end{array}$$

\_\_\_\_\_

5) 77

$$\begin{array}{r} \times 9 \\ \hline \end{array}$$

\_\_\_\_\_

6) 14

$$\begin{array}{r} \times 6 \\ \hline \end{array}$$

\_\_\_\_\_

7) 65

$$\begin{array}{r} \times 8 \\ \hline \end{array}$$

\_\_\_\_\_

8) 97

$$\begin{array}{r} \times 7 \\ \hline \end{array}$$

\_\_\_\_\_