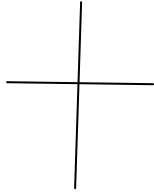


## Ο αλγόριθμος του πολλαπλασιασμού

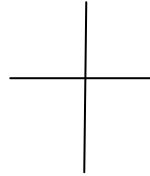
Όνομα: .....

1. Να κάνετε τις παρακάτω πολλαπλασιασμούς κάθετα με τις δοκιμές τους.

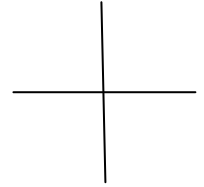
$$\begin{array}{r} 25 \\ \times 17 \\ \hline \end{array}$$



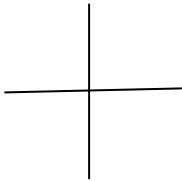
$$\begin{array}{r} 48 \\ \times 36 \\ \hline \end{array}$$



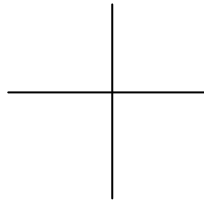
$$\begin{array}{r} 57 \\ \times 43 \\ \hline \end{array}$$



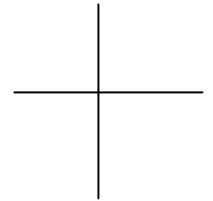
$$\begin{array}{r} 49 \\ \times 35 \\ \hline \end{array}$$



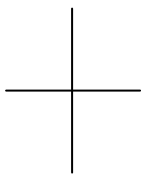
$$\begin{array}{r} 38 \\ \times 74 \\ \hline \end{array}$$



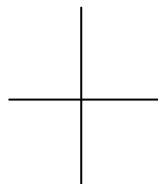
$$\begin{array}{r} 95 \\ \times 78 \\ \hline \end{array}$$



$$\begin{array}{r} 95 \\ \times 34 \\ \hline \end{array}$$



$$\begin{array}{r} 38 \\ \times 42 \\ \hline \end{array}$$



$$\begin{array}{r} 74 \\ \times 93 \\ \hline \end{array}$$

