



Διαιρέσεις

Όνομα:.....

1. Κάνε τις παρακάτω διαιρέσεις με την βοήθεια των εικόνων

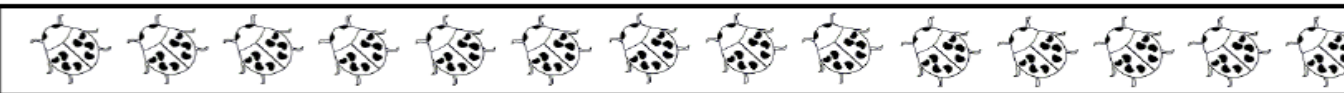
	$12 \div 6 = \square$
--	-----------------------

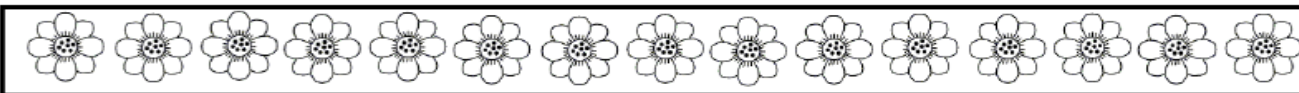
	$8 \div 4 = \square$
---	----------------------

	$10 \div 2 = \square$
---	-----------------------

	$6 \div 2 = \square$
---	----------------------

	$8 \div 2 = \square$
--	----------------------

	$14 \div 7 = \square$
--	-----------------------

	$15 \div 3 = \square$
--	-----------------------