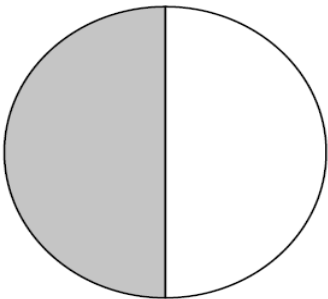
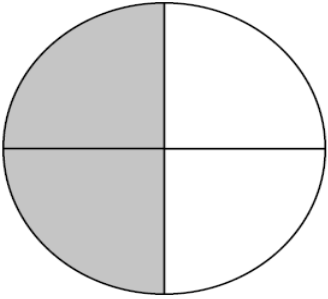
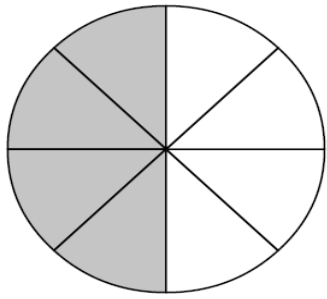


# Ισοδύναμα κλάσματα

Όνομα:.....

## 1. Συμπλήρωσε τις ισότητες

$\frac{1}{2}$	$\frac{2}{4}$	$\frac{4}{8}$
		
$\frac{1}{2} = \frac{\square}{4}$	$\frac{2}{4} = \frac{\square}{2}$	$\frac{4}{8} = \frac{\square}{2}$
$\frac{1}{2} = \frac{\square}{8}$	$\frac{2}{4} = \frac{\square}{8}$	$\frac{4}{8} = \frac{\square}{4}$