


Διαιρέσεις

Όνομα:.....

1. Κάνε τις παρακάτω διαιρέσεις με την βοήθεια των εικόνων


	$6 \div 3 = \square$
-----------------------------------------------------------------------------------	----------------------


	$9 \div 3 = \square$
-----------------------------------------------------------------------------------	----------------------

	$12 \div 6 = \square$
------------------------------------------------------------------------------------	-----------------------

	$4 \div 2 = \square$
-----------------------------------------------------------------------------------	----------------------

	$8 \div 4 = \square$
------------------------------------------------------------------------------------	----------------------

	$14 \div 2 = \square$
--------------------------------------------------------------------------------------	-----------------------

	$15 \div 5 = \square$
--------------------------------------------------------------------------------------	-----------------------