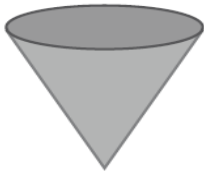


## Στερεά σώματα-αναπτύγματα

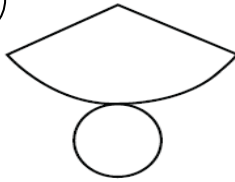
Όνομα:.....

### 1. Κύκλωσε το σωστό ανάπτυγμα σε κάθε στερεό σώμα

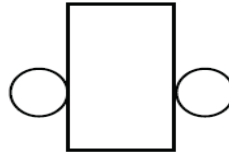
1)



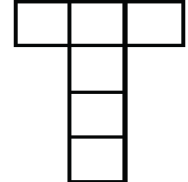
α



β



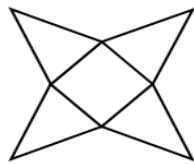
γ



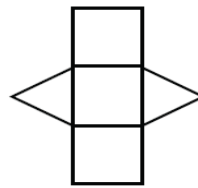
2)



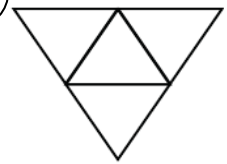
α



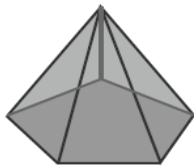
β



γ



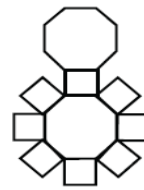
3)



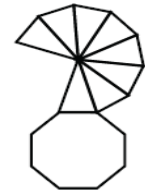
α



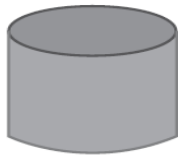
β



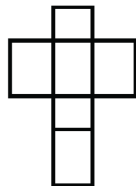
γ



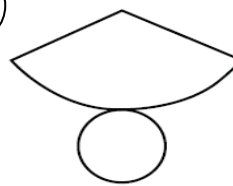
4)



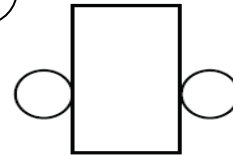
α



β



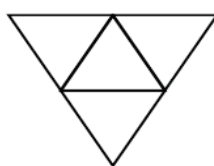
γ



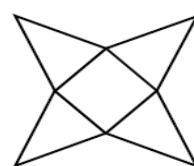
5)



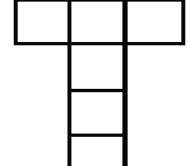
α



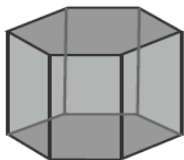
β



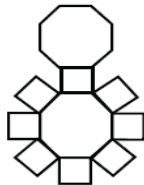
γ



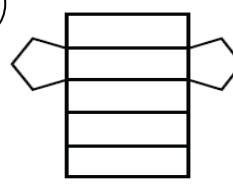
6)



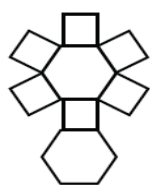
α



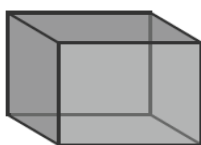
β



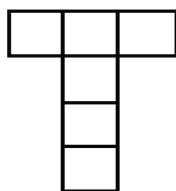
γ



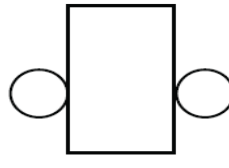
7)



α



β



γ

