


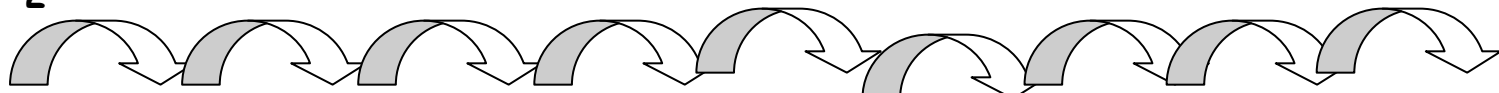
Εισαγωγή στον πολλαπλασιασμό

Όνομα: _____

1. Μετρώ ανά



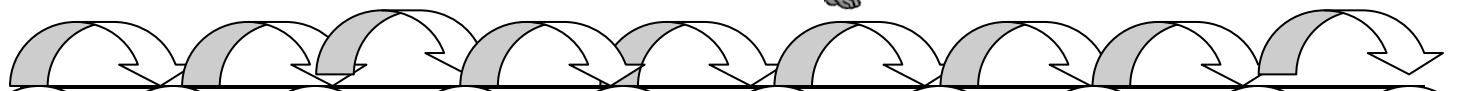
2



2

4

5



5

10

15

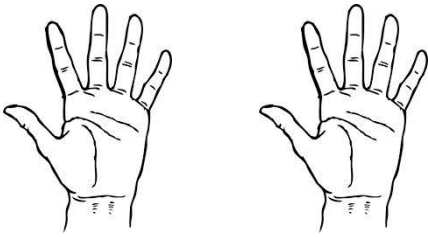
10



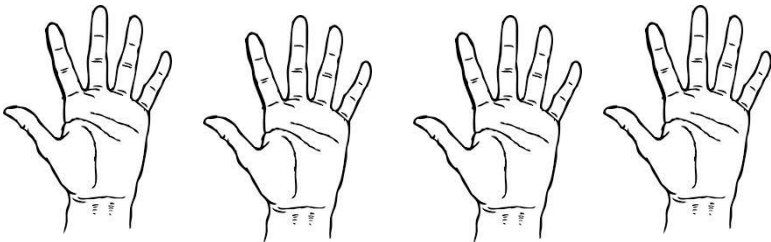
10

50

2. Μετρώ τα δάχτυλα

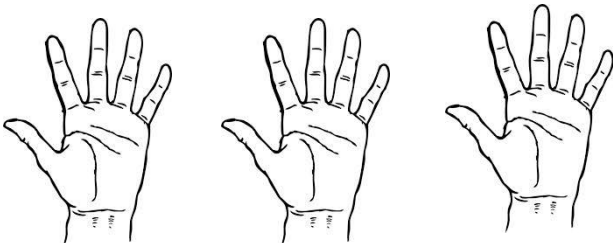


$$\square + \square = \square \text{ δηλαδή } \dots\dots\dots \text{ φορές το } 5 = \dots\dots\dots$$



$$\square + \square + \square + \square = \square$$

Δηλαδή φορές το =



$$\square + \square + \square = \square$$

Δηλαδή φορές το =