



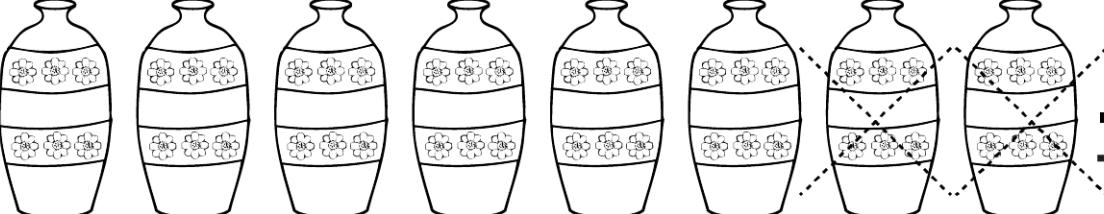


Όνομα: _____

1. Πόσο κάνουν;

	$\begin{array}{r} 4 \\ -2 \\ \hline \end{array}$
	$\begin{array}{r} 5 \\ -2 \\ \hline \end{array}$
	$\begin{array}{r} 6 \\ -3 \\ \hline \end{array}$
	$\begin{array}{r} 7 \\ -3 \\ \hline \end{array}$
	$\begin{array}{r} 8 \\ -2 \\ \hline \end{array}$