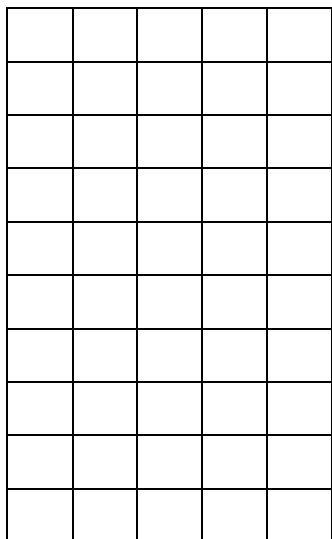


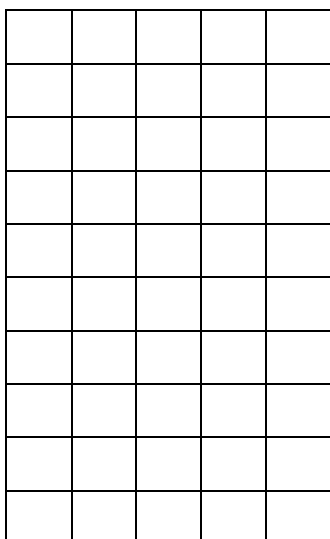
Οργάνωση συλλογών-Οι αριθμοί μέχρι το 50

Όνομα: _____

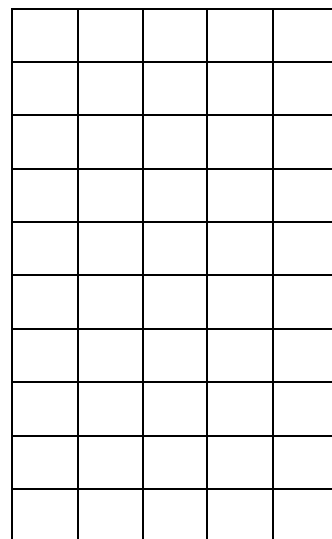
1. Χρωμάτισε όσα κουτάκια λέει ο αριθμός



26



48



32

2. Βρες το αποτέλεσμα



$$10 + 3 = \dots\dots\dots$$


$$10 + 10 + 10 + 6 = \dots\dots\dots$$

$$10 + 10 + 9 = \dots\dots\dots$$


$$10 + 10 + 10 + 10 + 5 = \dots\dots\dots$$

$$10 + 8 = \dots\dots\dots$$


3. Ανταλλάσσω 10 μικρά κεράκια με 1 μεγάλο




➤ Βάλε στις τούρτες τα σωστά κεράκια




28




31




14



40



23



22