



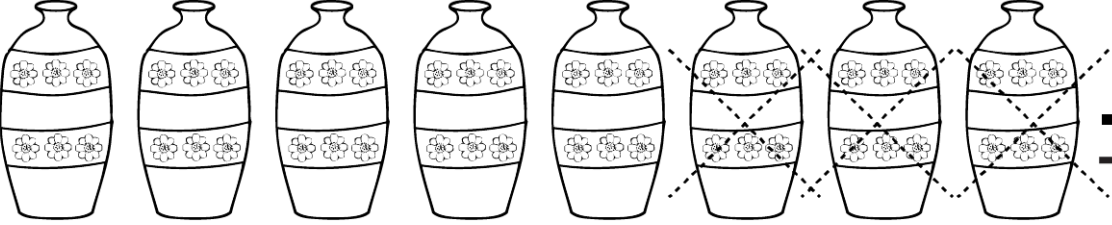


Όνομα: _____

1. Πόσο κάνουν;

| | |
|--|---|
|  | $\begin{array}{r} 4 \\ - 1 \\ \hline \end{array}$ |
|  | $\begin{array}{r} 5 \\ - 3 \\ \hline \end{array}$ |
|  | $\begin{array}{r} 6 \\ - 2 \\ \hline \end{array}$ |
|  | $\begin{array}{r} 7 \\ - 2 \\ \hline \end{array}$ |
|  | $\begin{array}{r} 8 \\ - 3 \\ \hline \end{array}$ |