





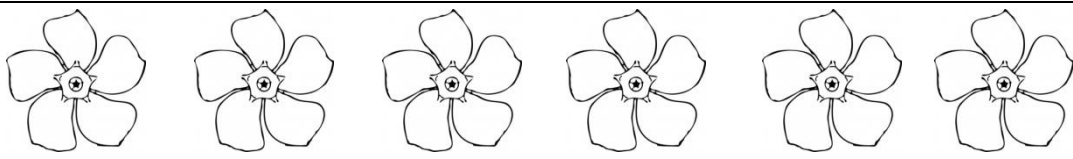



## Οι αριθμοί από το 6 μέχρι το 10 (II)

Όνομα: \_\_\_\_\_



### 1. Μετρώ τα αντικείμενα

2. Βάζω στις μολυβοθήκες όσα μολύβια χρειάζεται για να γίνουν όσα λέει ο αριθμός.





3. Βάζω τελίτσες και μετρώ όπως το παράδειγμα





4 και 2 = \_\_\_\_\_



5 και 3 = \_\_\_\_\_





6 και 3 = \_\_\_\_\_



4 και 4 = \_\_\_\_\_



7 και 2 = \_\_\_\_\_



10 και 0 = \_\_\_\_\_