


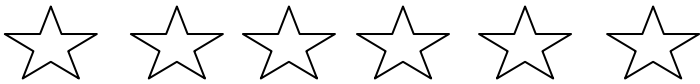
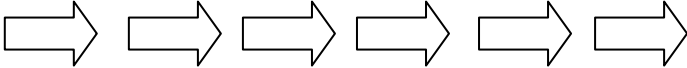
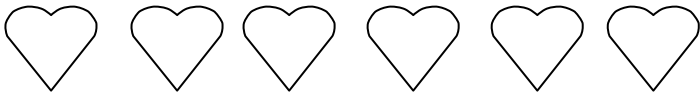

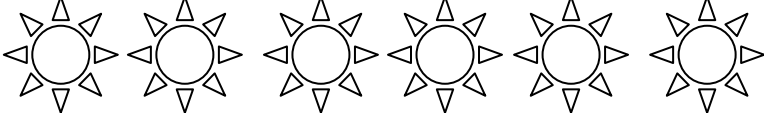
Ανάλυση και σύνθεση του 6

Όνομα: _____


1. Βάζω όσα αυγά χρειάζεται ακόμα για να έχουν όλα τα καλάθια από 6



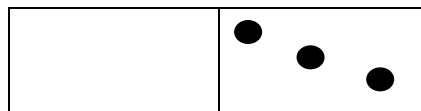
2. Κυκλώνω όσα μου ζητάνε κάθε φορά

	2 και 4
	6 και 0
	3 και 3
	1 και 5
	4 και 2

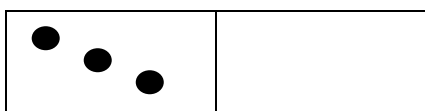
3. Συμπληρώνω ότι λείπει και ζωγραφίζω τα ντόμινο για να είναι όλα 6



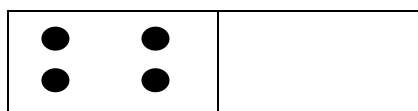
2 και 4 = 6



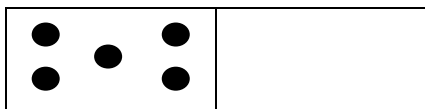
_____ και 3 = 6




3 και _____ = 6



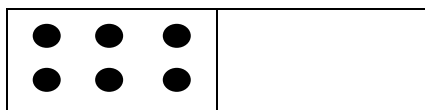
4 και _____ = 6



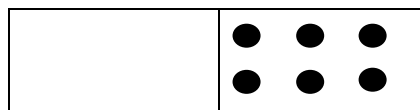
_____ και 5 = 6



1 και _____ = 6



6 και _____ = 6



_____ και 6 = 6