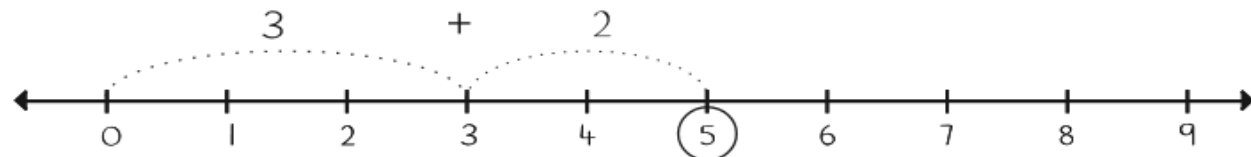


Όνομα: _____

Με τη βοήθεια της αριθμογραμμής να κάνεις τις παρακάτω προσθέσεις

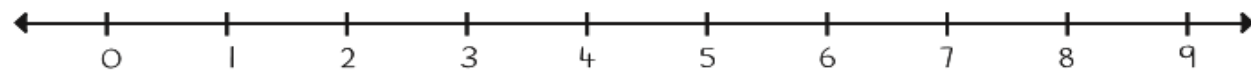
$$3 + 2 = \boxed{5}$$



$$5 + 1 = \boxed{}$$




$$1 + 4 = \boxed{}$$



$$6 + 2 = \boxed{}$$



$$2 + 7 = \boxed{}$$



$$6 + 2 = \boxed{}$$



$$3 + 1 = \boxed{}$$



$$5 + 2 = \boxed{}$$

