

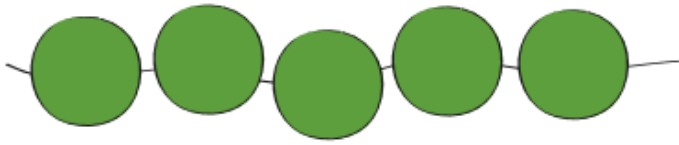


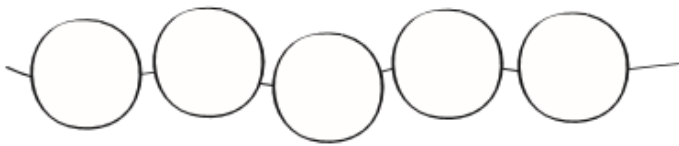
Όνομα: _____

Η ανάλυση του 5

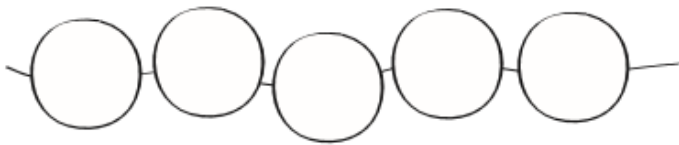
Χρωμάτισε με   για να δείξεις με ποιους τρόπους αναλύεται το 5



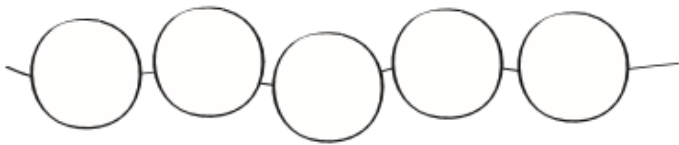
$$5 = \underline{5} + \underline{0}$$



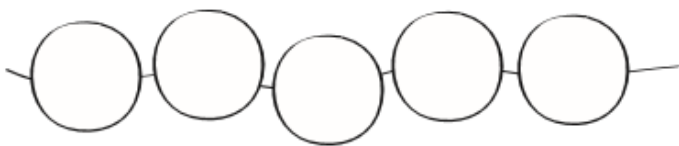
$$5 = \underline{\quad} + \underline{\quad}$$



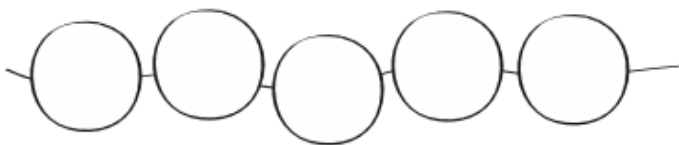
$$5 = \underline{\quad} + \underline{\quad}$$



$$5 = \underline{\quad} + \underline{\quad}$$



$$5 = \underline{\quad} + \underline{\quad}$$



$$5 = \underline{\quad} + \underline{\quad}$$